



Считаем.


Напиши примеры и реши их.



$$\textcircled{?} + \textcircled{?} = \textcircled{?}$$



$$\textcircled{?} + \textcircled{?} = \textcircled{?}$$



$$\textcircled{?} + \textcircled{?} = \textcircled{?}$$

Ответ: 7+2=9, 3+3=6, 4+5=9.

Считаем.

Напиши примеры и реши их.

$$\textcircled{?} + \textcircled{1} = \textcircled{4}$$

$$\textcircled{10} - \textcircled{?} = \textcircled{8}$$




$$\textcircled{?} - \textcircled{7} = \textcircled{2}$$

$$\textcircled{9} + \textcircled{?} = \textcircled{12}$$



$$\textcircled{?} - \textcircled{4} = \textcircled{3}$$

$$\textcircled{11} - \textcircled{?} = \textcircled{5}$$



Ответ: 3+1=4, 10-2=8, 9-7=2, 9+3=12, 7-4=3, 11-6=5.